




--	--	--	--	--

$$5 - 1 = \underline{\quad}$$



--	--	--	--	--

$$4 - 1 = \underline{\quad}$$



--	--	--	--	--

$$3 - 1 = \underline{\quad}$$



--	--	--	--	--

$$2 - 1 = \underline{\quad}$$



--	--	--	--	--

$$5 - 2 = \underline{\quad}$$



--	--	--	--	--

$$4 - 2 = \underline{\quad}$$




--	--	--	--	--

$$3 - 2 = \underline{\quad}$$



--	--	--	--	--

$$2 - 0 = \underline{\quad}$$



--	--	--	--	--

$$5 - 3 = \underline{\quad}$$



--	--	--	--	--

$$4 - 3 = \underline{\quad}$$



--	--	--	--	--

$$3 - 3 = \underline{\quad}$$



--	--	--	--	--

$$1 - 1 = \underline{\quad}$$



--	--	--	--	--

$$5 - 4 = \underline{\quad}$$



--	--	--	--	--

$$4 - 4 = \underline{\quad}$$



--	--	--	--	--

$$5 - 5 = \underline{\quad}$$



--	--	--	--	--

$$4 - 0 = \underline{\quad}$$

Name: _____



$5 - 1 = \underline{\quad}$




$5 - 2 = \underline{\quad}$



$4 - 1 = \underline{\quad}$



$4 - 2 = \underline{\quad}$



$3 - 1 = \underline{\quad}$



$3 - 2 = \underline{\quad}$



$3 - 1 = \underline{\quad}$



$2 - 0 = \underline{\quad}$

Name: _____



$5 - 3 = \underline{\quad}$



$5 - 4 = \underline{\quad}$



$4 - 3 = \underline{\quad}$



$4 - 4 = \underline{\quad}$



$3 - 3 = \underline{\quad}$



$5 - 5 = \underline{\quad}$



$4 - 0 = \underline{\quad}$



$1 - 1 = \underline{\quad}$